



































<p>25</p>	<p>Which one of the five designs is least like the other four?</p> <p>(A)  (B)  (C)  (D)  (E) </p>	
<p>26</p>	<p>Which one of the letters does not belong in the following series: A - D - G - I - J - M - P - S</p> <p style="text-align: center;">D I J M S</p>	
<p>27</p>	<p>Which one of the five designs makes the best comparison?</p> <p>(A)   is to  as  is to:  as  is to:</p> <p>(B)   (C)   (D)   (E)  </p>	
<p>28</p>	<p>The price of an article was cut 20% for a sale. By what percent must the item be increased to again sell the article at the original price?</p> <p style="text-align: center;">15% 20% 25% 30% 40%</p>	
<p>29</p>	<p>Which one of the five is least like the other four?</p> <p style="text-align: center;">COPPER IRON BRASS TIN LEAD</p>	
<p>30</p>	<p>Which one of the five designs makes the best comparison?</p> <p> is to  as  is to:</p> <p>(A)  (B)  (C)  (D)  (E) </p>	
<p>31</p>	<p>Which one of the five is least like the other four?</p> <p style="text-align: center;">BOTTLE CUP TUB FUNNEL BOWL</p>	
<p>32</p>	<p>Mary had a number of cookies. After eating one, she gave half the remainder to her sister. After eating another cookie, she gave half of what was left to her brother. Mary now had only five cookies left. How many cookies did she start with?</p> <p style="text-align: center;">11 22 23 45 46</p>	
<p>33</p>	<p>Which one of the five is least like the other four?</p> <p style="text-align: center;">WHEAT HAY BARLEY OATS RICE</p>	
<p>34</p>	<p>Which one of the numbers does not belong in the following series? 2 - 3 - 6 - 7 - 8 - 14 - 15 - 30</p> <p style="text-align: center;">THREE SEVEN EIGHT FIFTEEN THIRTY</p>	
<p>35</p>	<p>Which one of the five designs makes the best comparison?</p> <p>(A)  is to  as  is to:</p> <p>(B)  (C)  (D)  (E) </p>	
<p>36</p>	<p>"A spaceship received three messages in a strange language from a distant planet. The astronauts studied these messages and found out that "Elros Aldarion Elendil" means "Danger Rocket Explosion" and "Edain Minyatur Eiros " means "Danger spaceship Fire" and "Aldarion Gimiltzor Gondor" means "Bad Gas Explosion".</p> <p>What does "Elendil" mean?</p> <p style="text-align: center;">DANGER EXPLOSION NOTHING ROCKET GAS</p>	