



















ANSWER

<p>13</p>	<p>Which one of the five designs is least like the other four?</p> <p>(A)  (B)  (C)  (D)  (E) </p>	
<p>14</p>	<p>Which one of the five makes the best comparison? Tree is to ground as chimney is to:</p> <p>SMOKE BRICK SKY GARAGE HOUSE</p>	
<p>15</p>	<p>Which one of the numbers does not belong in the following series? 9-7-8-6-7-5-6-3</p> <p>NINE EIGHT SIX FIVE THREE</p>	
<p>16</p>	<p>Which one of the five is least like the other four?</p> <p>TOUCH TASTE HEAR SMILE SEE</p>	
<p>17</p>	<p>Which one of the five designs makes the best comparison?</p> <p> is to  as  is to:</p> <p>(A)  (B)  (C)  (D)  (E) </p>	
<p>18</p>	<p>Jack is taller than Peter, and Bill is shorter than Jack. Which of the following statements would be most accurate?</p> <p>(A) Bill is taller than Peter. (B) Bill is shorter than Peter. (C) Bill is as tall as Peter. (D) It is impossible to tell whether Bill or Peter is taller.</p>	
<p>19</p>	<p>Which one of the five is least like the other four?</p> <p>STOCKING DRESS SHOE PURSE HAT</p>	
<p>20</p>	<p>Which one of the five choices makes the best comparison? CAACCAC is to 3113313 as CACAACAC is to:</p> <p>(A) 13133131 (B) 13133313 (C) 31311131 (D) 31311313 (E) 31313113</p>	
<p>21</p>	<p>If you rearrange the letters "RAPIS", you would have the name of a:</p> <p>OCEAN COUNTRY STATE CITY ANIMAL</p>	
<p>22</p>	<p>Which one of the five designs is least like the other four?</p> <p>(A)  (B)  (C)  (D)  (E) </p>	
<p>23</p>	<p>Which one of the five makes the best comparison? Bullet is to gun as ball is to:</p> <p>BAT SLINGSHOT CANNON PITCHER CATAPULT</p>	
<p>24</p>	<p>"If some Bifurs are Bofurs and all Gloins are Bofurs, then some Bifurs are definitely Gloins." This statement is: TRUE FALSE NEITHER</p>	